

English:

English assignment

Task 1:

Q.1 Fill in the blanks with suitable conjunction (and/ but/or)

1. The table _____ the chairs are broken.
2. I know the answer _____ I can't tell you.
3. Suman tasted the soup _____ liked it.
4. I want to watch T.V. _____ I have to study.
5. Do you want cherries _____ grapes?

Homework:

Q.2 Fill in the blanks with and, but, or

- 1) The train stopped _____ the passengers got down.
- 2) I will watch a movie _____ a serial.
- 3) We have some bread _____ we have no jam.
- 4) I have a dog _____ a cat.
- 5) I can speak English _____ I cannot speak French.

Task 2

Comprehension

Alexander Graham Bell



Alexander Graham Bell was a famous scientist, engineer and inventor. He was born on March 3rd, 1847 in Scotland. Both Alexander's mom and wife were deaf which had a major influence on his work. In 1876, Alexander Graham Bell invented the first working telephone. He even said towards the end of his career, "The day will come when the man at the telephone will be able to see the distant person to whom he is speaking." Alexander was right!

Q.) Answer the following questions.

a) What did Alexander's mom and wife have in common?

b) He was not a _____

engineer farmer inventor scientist

c) Where was Alexander born?

d) What did Alexander invent?

e) Why does the passage say "Alexander was right"?

Task 2:

Johannes Gutenberg



Johannes Gutenberg invented the Gutenberg press in 1440. Before this, books had to be handwritten, or a wood block had to be carved for printing. His press had metal letters that could be moved around to make words. This made printing books



faster and cheaper, so books could be bought by ordinary people, instead of only the rich, for the first time.

Q. Answer the following questions.

A) What did Johannes Gutenberg invent?

Ans.) _____

B) How were books made before the printing press?

C) Why was the printing press important?

Maths:

Shapes and Patterns

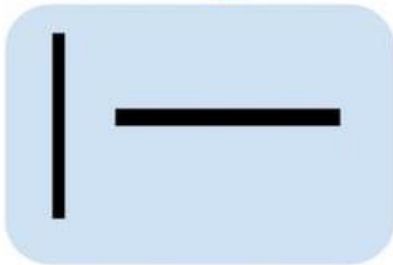
Lines

Watch the video to understand the concept of lines

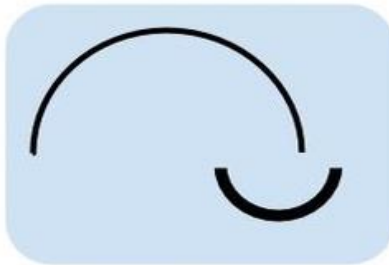
<https://www.youtube.com/watch?v=TQ2qttvbknQ>

Lines

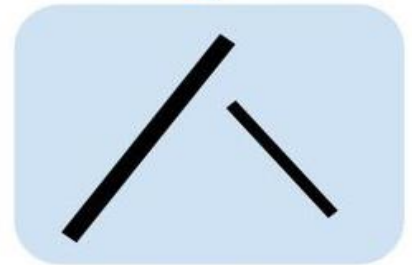
Straight



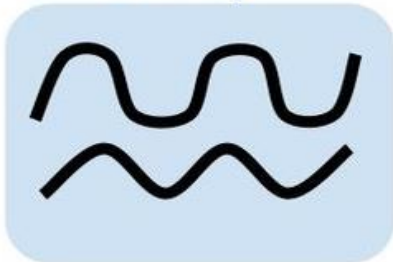
Curved



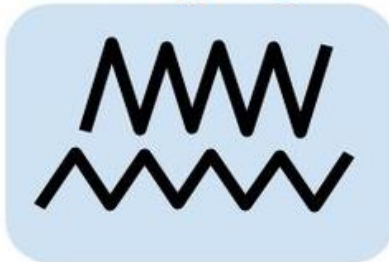
Diagonal



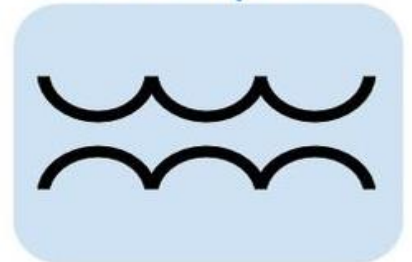
Wavy



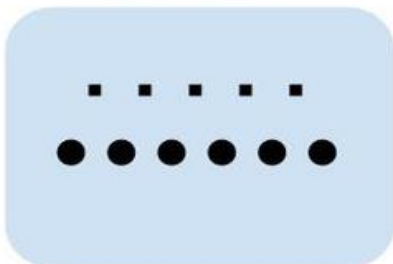
Zigzag




Scalloped



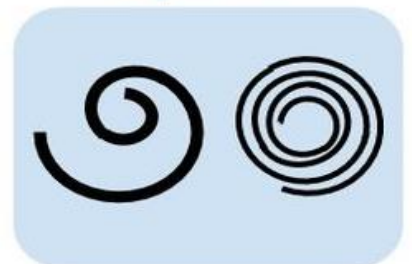
Dotted



Dashed




Spiral



Task:1

write name _____
write roll number _____

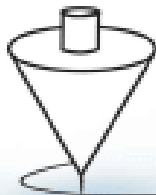
class _____ section _____



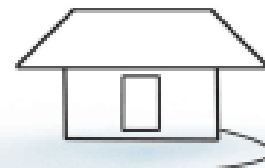
straight or
crooked



Line drawing of various objects are given. Can you tell how many standing, sleeping, slanting and curved lines are required to make them?




Standing lines = ... 4
Sleeping lines = ... 5
Slanting lines = ... 2
Curved lines = ... 0



..... = Standing lines
..... = Sleeping lines
..... = Slanting lines
..... = Curved lines



Standing lines =
Sleeping lines =
Slanting lines =
Curved lines =



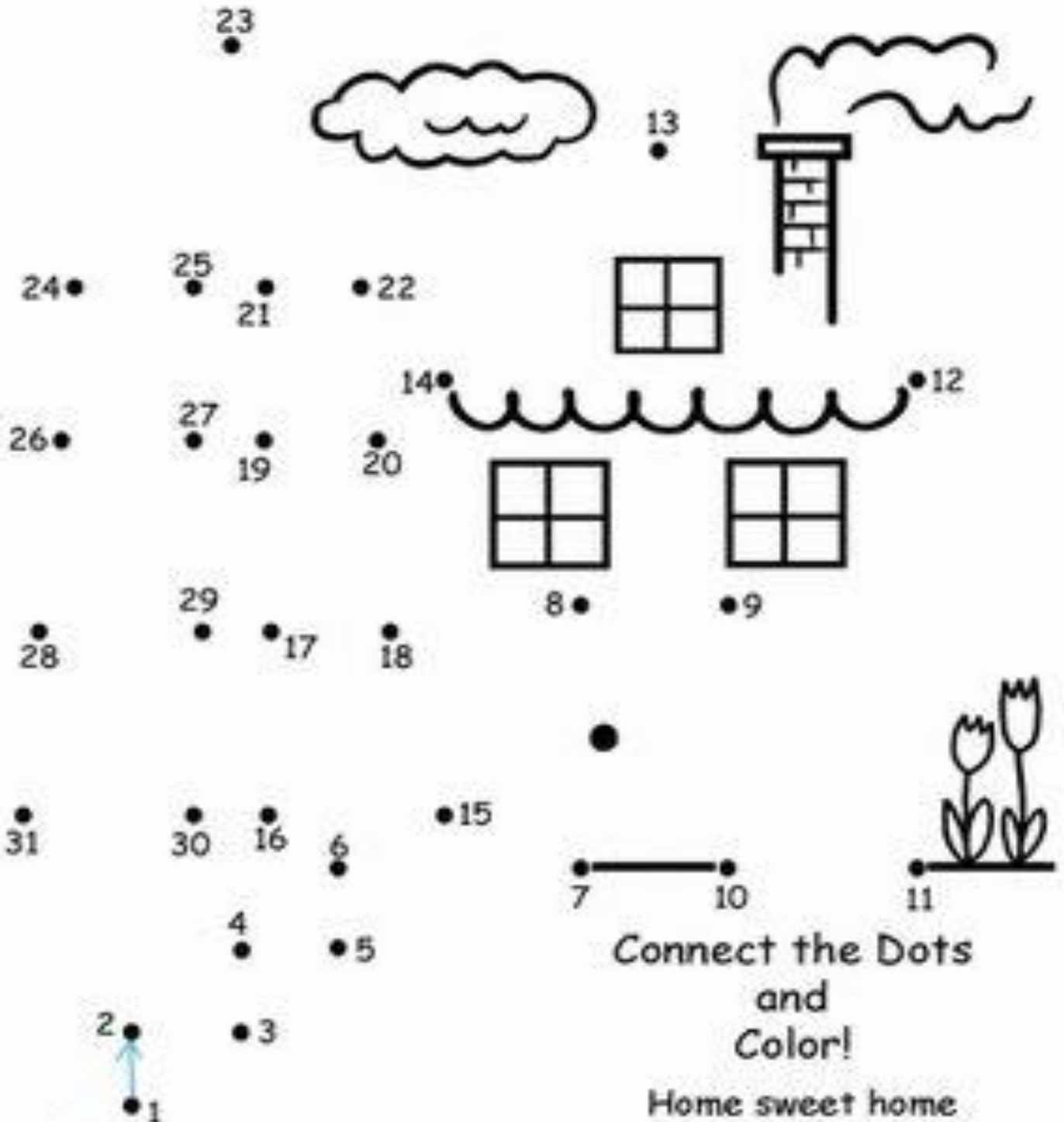
..... = Standing lines
..... = Sleeping lines
..... = Slanting lines
..... = Curved lines

Standing lines =
Sleeping lines =
Slanting lines =
Curved lines =



Task:2

Join the dots with the help of different types of lines to complete an image. Colour it to make it beautiful.



Shapes and Patterns

Line Segment

Watch the video to understand how to draw a line segment with the help of scale/ruler.


<https://www.youtube.com/watch?v=2niuf18BvLk>

Lines, Line Segments, and Rays



A **point** has no size or shape, just position

 M Point M

A **line** is a straight path of points that has no beginning or end.

 Line \overleftrightarrow{XY}

A **line segment** is a portion of a line that has two endpoints.

  Line segment \overline{AB}

Draw a line segment for each measurement:

- 5 cm
- 7.5 cm
- 3 cm
- 4 cm

Hindi:

<https://www.youtube.com/watch?v=FtIYgc2P440>

वीडियो के आधार पर मौखिक आँकलन लिया जाएगा ।

UOI:

TD Theme: Where We Are In Place and Time

LOI 2-Change due to discoveries and invention

Finding out



<https://www.youtube.com/watch?v=WeushnbZsXI>

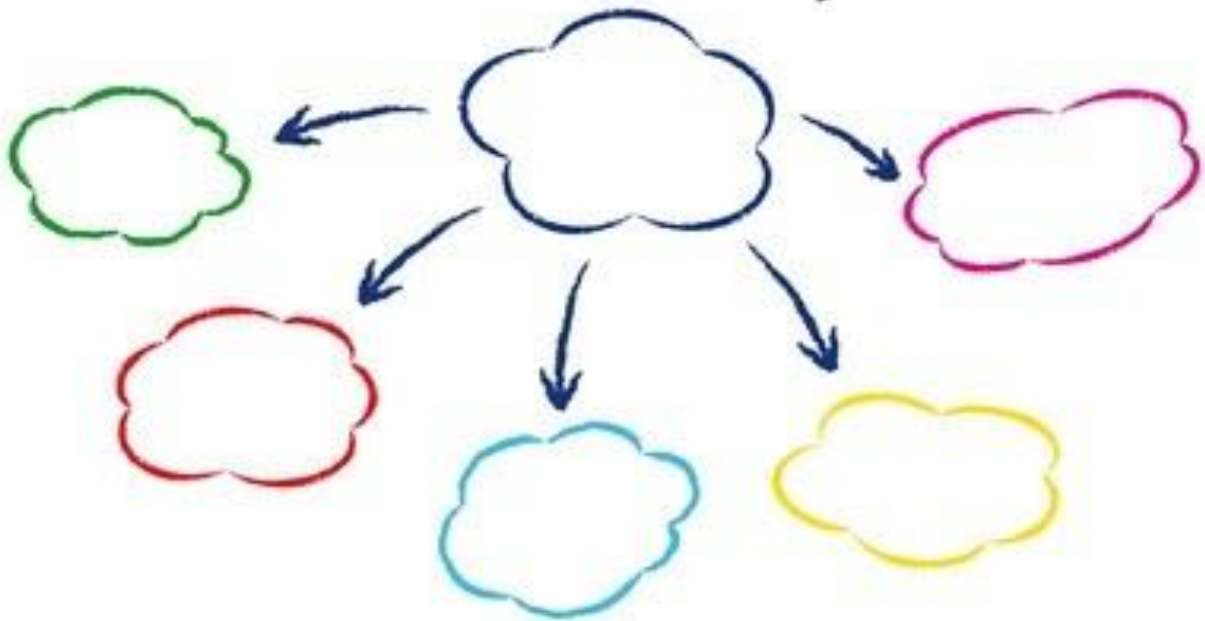
Watch the video

VTR – Think-Wink-Decide

This picture tells us about one of the earliest discoveries of all time. What is it? How had it changed life of early man? How do we make use of fire? Think and reflect.



Mindmap



My Reflection

I became _____ and I developed _____
while learning about _____

ART:

Find the suitable pieces of puzzle given in the material kit and arrange them correctly to complete the picture. Now apply glue and paste the picture in the given space.

Dance:

<https://www.youtube.com/watch?v=BQS9S2KVFig>

Task- watch and understand use of light in dance